

Nome _____

Data _____

1. Relaciona correctamente.



•

•

5



•

•


6



•

•

8




•


•

5


2. Pinta o número de bolas indicado



5



9



4

3. Completa.

1 - _____ - 3 - _____ - 5 - _____ - _____ - 8 - _____ - 10

4. Efectua.

$3 + 3 = \underline{\quad}$

$5 + 3 = \underline{\quad}$

$1 + 3 = \underline{\quad}$

$1 + 2 = \underline{\quad}$

$9 - 2 = \underline{\quad}$

$8 - 4 = \underline{\quad}$

$8 - 3 = \underline{\quad}$

$9 - 5 = \underline{\quad}$

5. Completa de forma correcta colocando o número na etiqueta.

