


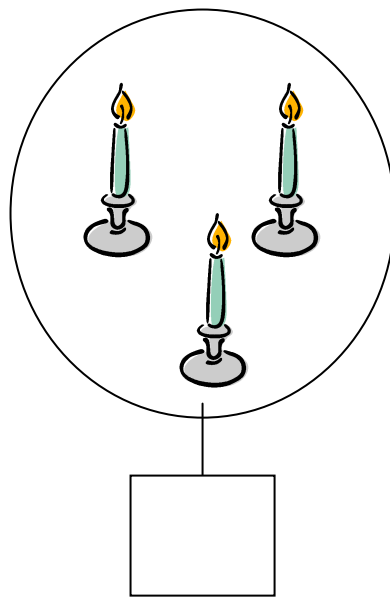
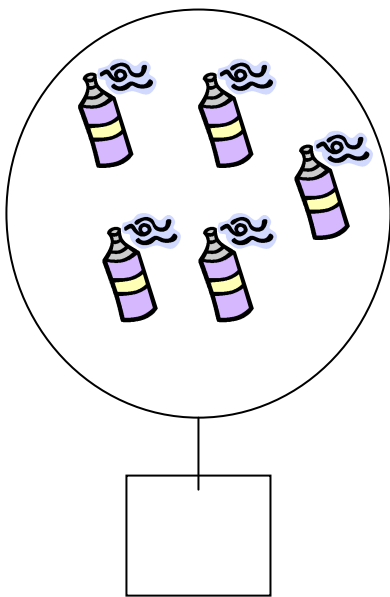
Nome \_\_\_\_\_

Data \_\_\_\_\_

**1. Forma conjuntos de 5 estrelas.**



**2. Observa os conjuntos e completa com os números correctos.**




3. Observa e completa.



$3 + 2 = \underline{\quad}$



$2 + 2 = \underline{\quad}$




$\underline{\quad} + 2 = 5$



$2 + \underline{\quad} = 5$

4. Escreve os números por ordem crescente.



\_\_\_\_\_ < \_\_\_\_\_



\_\_\_\_\_ < \_\_\_\_\_