




Matemática





Nome _____

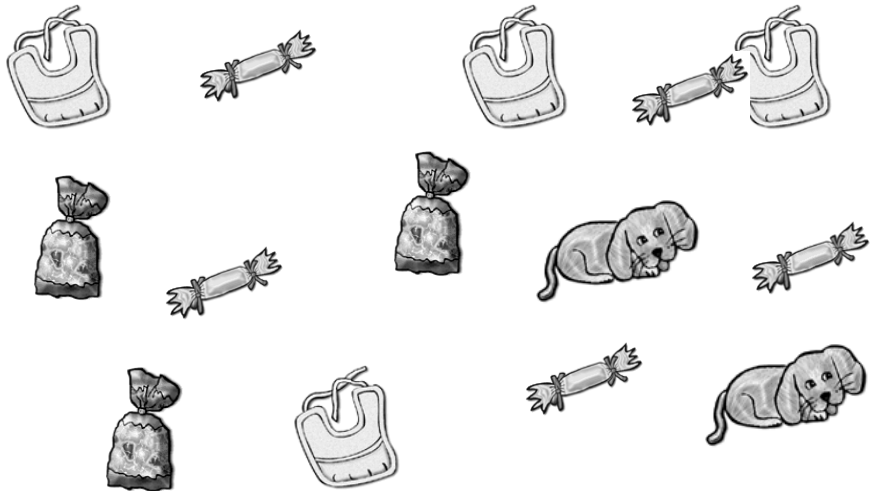
Data _____

1. Escreve o algarismo no lugar certo.



2. Completa a tabela.



3. Escreve os algarismos que faltam.

1	2		4				8	
---	---	--	---	--	--	--	---	--

4. Completa:

$2 + 3 = \square$

$2 + 4 = \square$

$3 + 4 = \square$

$7 + 2 = \square$

$5 + 3 = \square$

$2 + 6 = \square$

5. Escreve >, < ou =.

$1 \square 2$

$5 \square 4$

$1 + 1 \square 2$

$3 \square 2 + 1$

$6 \square 5$

$7 \square 6$

6. Liga correctamente.

$5 + 4$



$4 + 4$



$2 + 7$



$1 + 3$

$6 + 1$

$6 + 3$

7. Observa e completa de acordo com o exemplo.

