

# Matemática




NOME \_\_\_\_\_

DATA \_\_\_\_/\_\_\_\_/\_\_\_\_

1. Assinala com um (X) o conjunto que tem menos cães.



2. Assinala com um (X) o conjunto que tem mais joaninhas.



3. Ligo cada conjunto à sua etiqueta.

